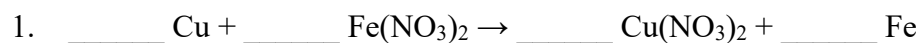


Reaction Types
Hand-In Assignment

Name: _____

Balance and classify each of the following chemical reactions.



Reaction type: _____



Reaction type: _____



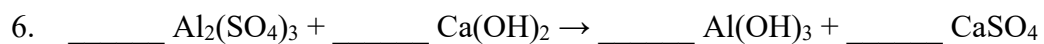
Reaction type: _____



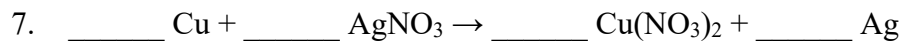
Reaction type: _____



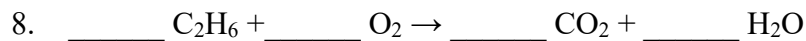
Reaction type: _____



Reaction type: _____



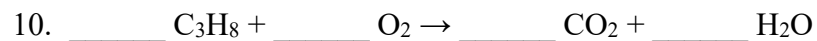
Reaction type: _____



Reaction type: _____



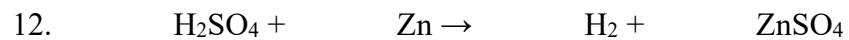
Reaction type: _____



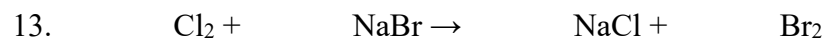
Reaction type: _____



Reaction type: _____



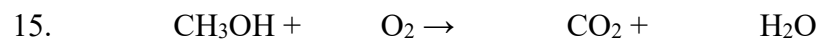
Reaction type: _____



Reaction type: _____



Reaction type: _____



Reaction type: _____